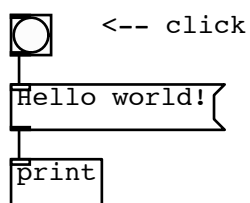
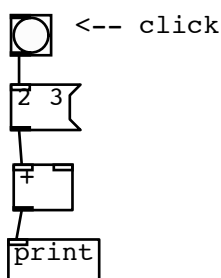


1) Write down the output from the Pd window:



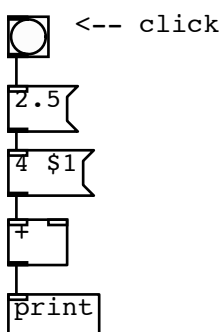
print: _____

2) Write down the output from the Pd window:



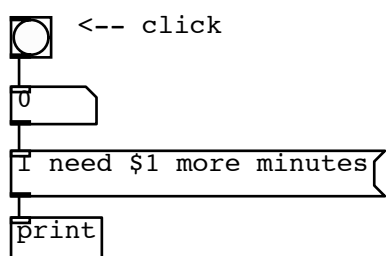
print: _____

3) Write down the output from the Pd window:



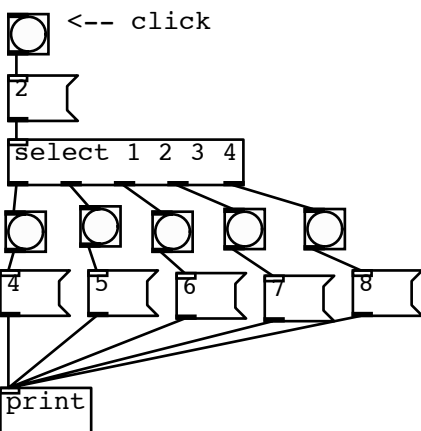
print: _____

4) Write down the output from the Pd window:



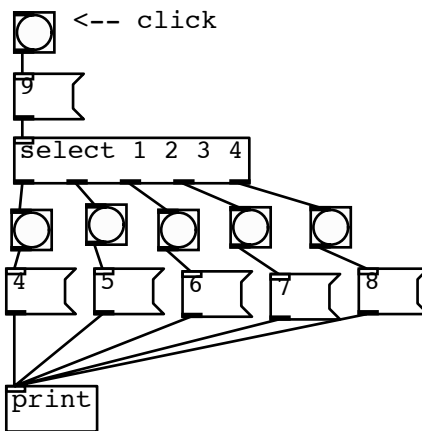
print: _____

5) Write down the output from the Pd window:



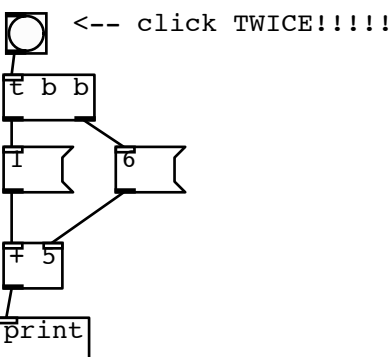
print: _____

6) Write down the output from the Pd window:



print: _____

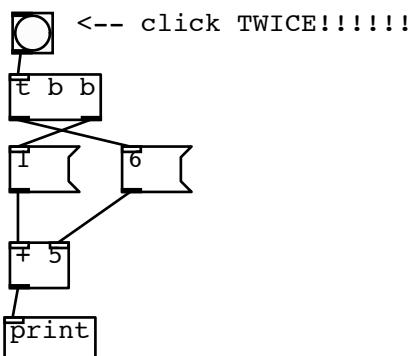
7) Write down the output from the Pd window:



print: _____

print: _____

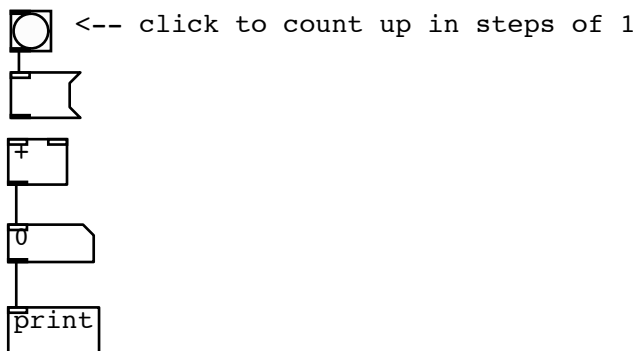
8) Write down the output from the Pd window:



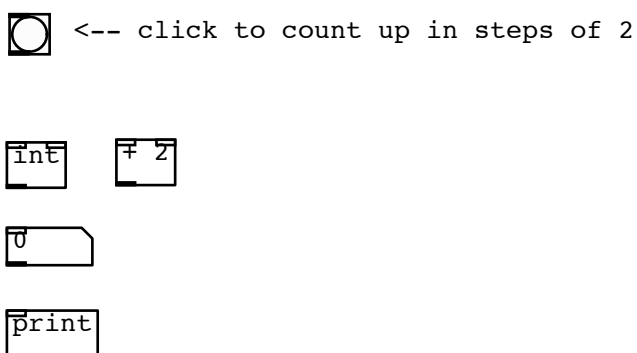
print: _____

print: _____

9) Turn this patch into a counter (draw cords, fill in names)



10) Turn this patch into a counter (draw cords, fill in names)



BONUS QUESTION:
Draw a patch that sends a bang to a print object every second.